

Welland Gouldsmith School

Mathematics

Class - KG

Time: 40 minutes


Fill in the missing numbers


The image shows five cartoon caterpillars, each with a vertical column of 10 green circles representing its body segments. The circles contain numbers in a sequence, with some missing. The caterpillars are arranged in a row, and each has two antennae and two eyes.

Caterpillar	Segment 1	Segment 2	Segment 3	Segment 4	Segment 5	Segment 6	Segment 7	Segment 8	Segment 9	Segment 10
1	1		3		5		7		8	10
2	11		13		15		17			20
3	21		23		25		27			30
4	31		33		35		37			40
5	41		43		45		47			50



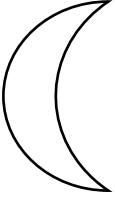
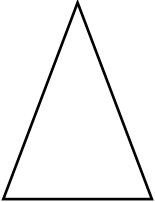
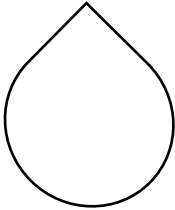
Farm Animal Counting

Count the number of each animal and write the number in the box






Draw the correct
number of each item

5		
3		
4		
1		
2		

NUMBER MATCH

Draw a line from each number to the picture that shows how many



1

2

3

4

5


6

7

8

9

10



WHAT'S THE NUMBER?

Write the words in number form:

- | | | | |
|-----------------|-------|-----------------|-------|
| 1. Seventeen | _____ | 12. Ten | _____ |
| 2. Nineteen | _____ | 13. Zero | _____ |
| 3. Seven | _____ | 14. Thirteen | _____ |
| 4. Fifteen | _____ | 15. Three | _____ |
| 5. Twenty | _____ | 16. Fifty-one | _____ |
| 6. Five | _____ | 17. Sixteen | _____ |
| 7. Forty-four | _____ | 18. Nineteen | _____ |
| 8. Sixty-two | _____ | 19. Forty-seven | _____ |
| 9. Thirty-two | _____ | 20. Sixty-nine | _____ |
| 10. Seventy-two | _____ | 21. Fifty-eight | _____ |
| 11. Four | _____ | 22. Thirty-six | _____ |

Write in words



a. 14 _____

b. 20 _____

c. 13 _____

d. 11 _____

e. 17 _____

f. 15 _____

g. 25 _____

h. 30 _____

i. 22 _____

j. 10 _____