

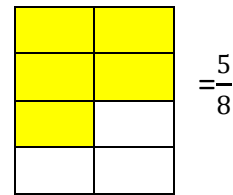
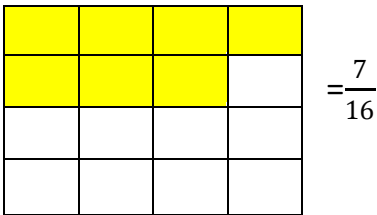
WELLAND GOULDSMITH SCHOOL

CLASS-V

NUMBERS IN TROUBLE!!

ANSWER KEY-WORKSHEET II

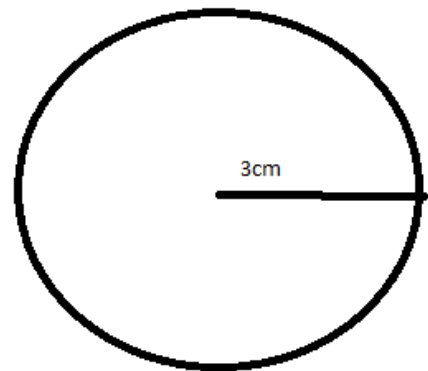
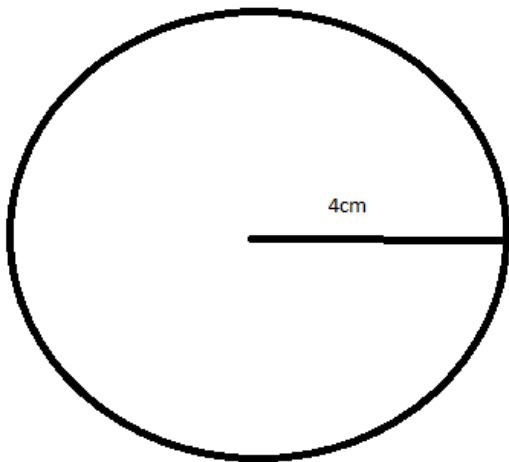
1. Shade the figure to show the given fractions:-



2. 1,23,456 ; 1,23,546 ; 1,23,564 ; 1,32,456

3. a. Diameter-8cm; Radius- 4cm

b. Diameter=6cm; Radius= 3cm



4. 2 days

5. 15 pears

6. Multiply:

a) $132 \times 12 = 1584$

b) $1341 \times 13 = 17,433$

7. Total amount paid by the company = 4500×6

=Rs.27, 000

8. Total sacks of corns = 59576

Total sacks of flour = 40286

Total sacks of oats = 31545

Total number of sacks = 131,407

9.

2	x	3	=	6		6	x	5	=	30
					x					
4	x	1	=	4		8	x	4	=	32
				=						
		2	x	24	=	48				

2	x	7	=	14		3	x	12	=	36
					x					
11		5	x	3	=	15				
				=						
22				42		45	x	2	=	90

10. LET'S SCORE 100!!!!

$37+63$; $51+49$; $84+16$; $26+74$; $82+18$

