

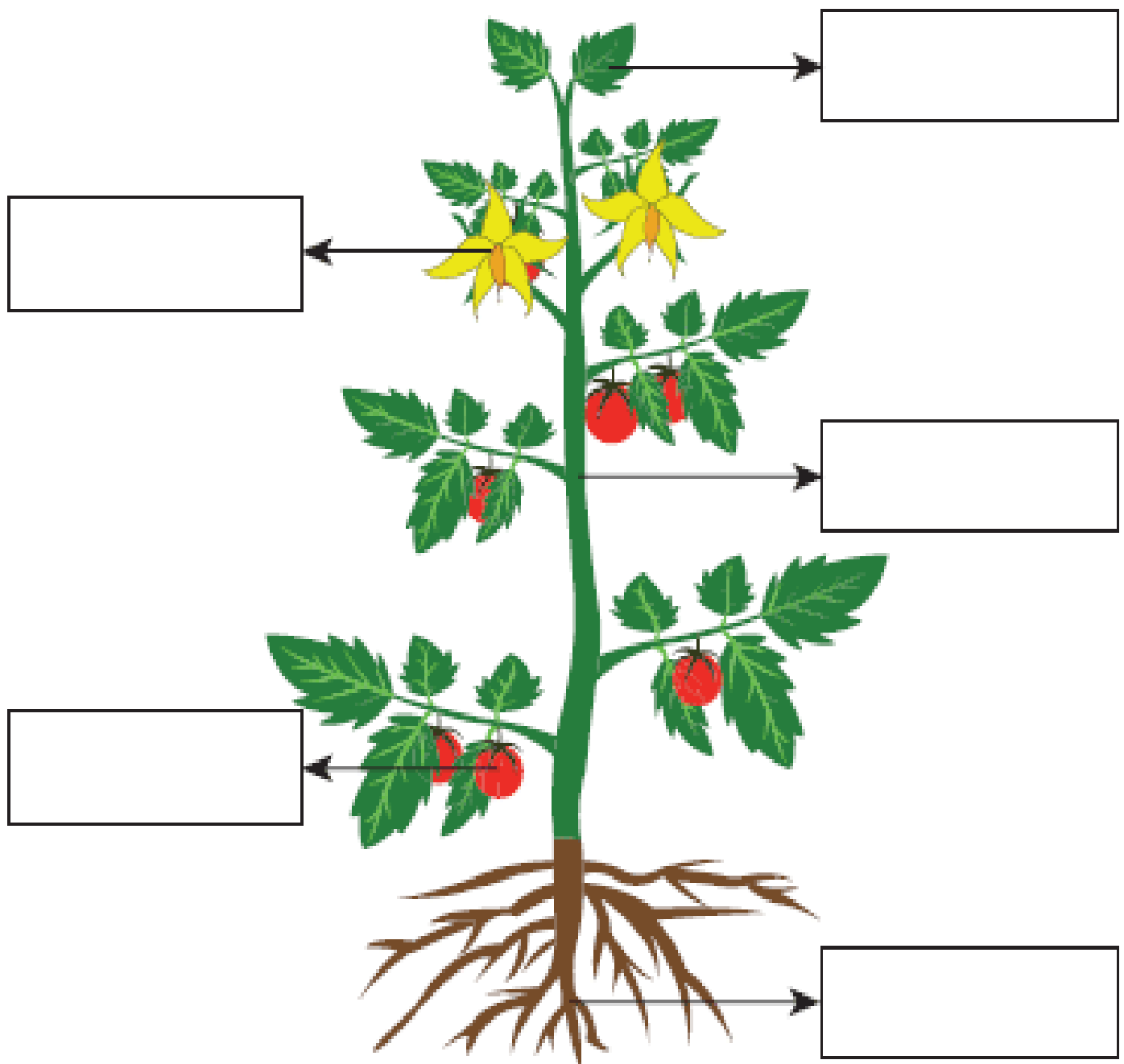
Welland Gouldsmith School

Science

Class - I

Time: 40 minutes

Observe the picture given below and identify the parts labelled:


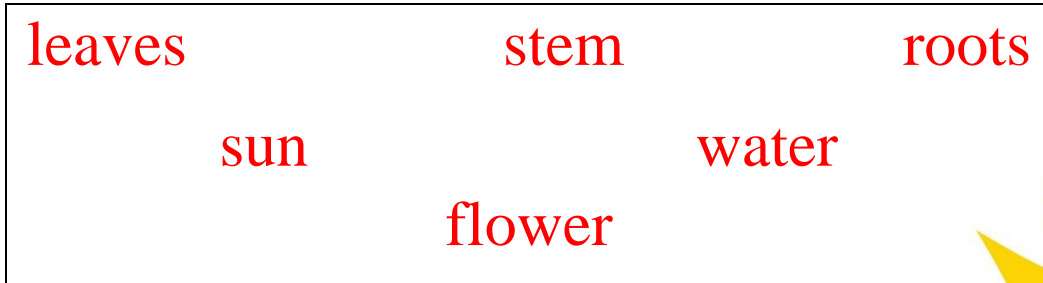




About Plants



Fill in the blanks with words from the box.



1. To grow, a plant needs _____ and _____.
2. The _____ on the plant helps to make seeds and fruit.
3. The _____ absorb the water and hold the plant in the soil.
4. The _____ use the sun and air to make food for the plant.
5. The _____ brings water to the rest of the plant.

Fill in the blanks with the help of the given words:

carrot cub den shed leaves

a. Rabbits like to eat _____.


b. A lion lives in the _____.

c. Cows are kept in the

_____.

d. Giraffes like to eat _____.

e. A baby tiger is called a _____.



Write good habit or bad habit

a. Writing on the wall _____.


b. Sitting too close to the television _____.

c. Taking bath daily _____.

d. Leaving the tap running

_____.

e. Brushing your teeth _____.



How's the weather?

Complete the sentence with the correct weather word:

1. It is a _____ day.



2. It is a _____ day.



3. It is a _____ day.



4. It is a _____ day.

5. It is a _____


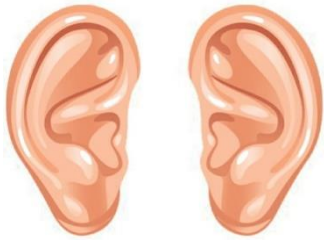
day.



6. It is a _____ day.



Five Senses



1. I use my _____ to see.
2. I use my _____ to smell.
3. _____ are used to hear sounds.
4. My _____ can touch things.
5. I use my _____ to taste.